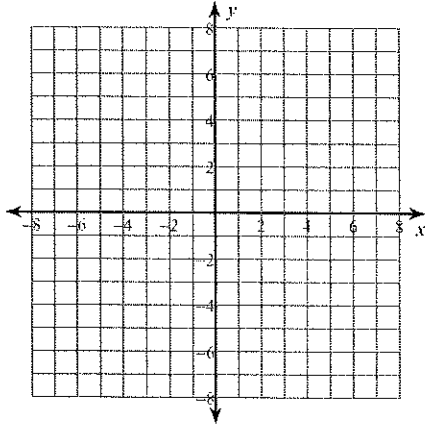


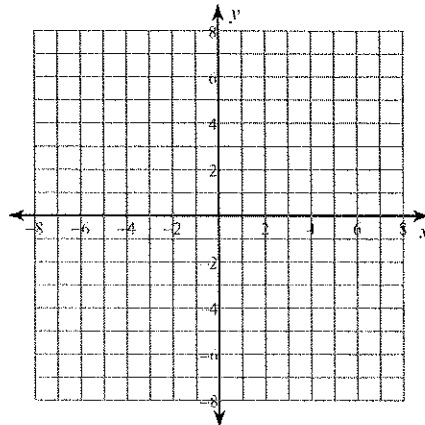
# Graphing Activity

Graph each function.

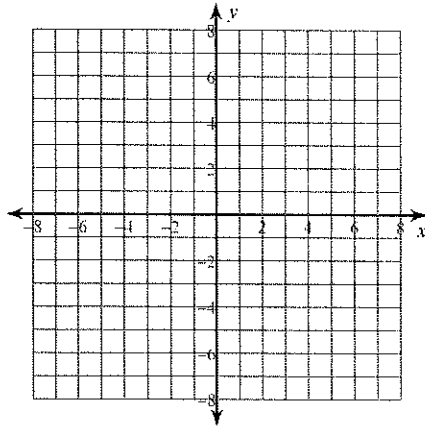
1)  $f(x) = \frac{x + 3}{-3x - 6}$



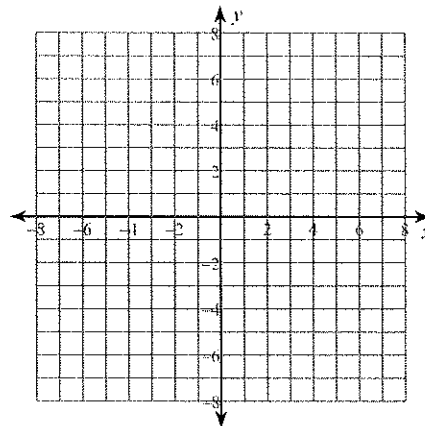
2)  $f(x) = \frac{x}{x + 3}$



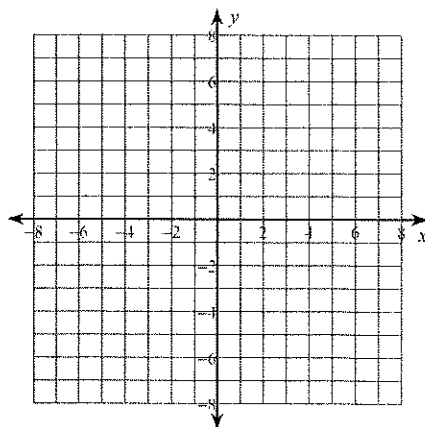
3)  $f(x) = \frac{x + 1}{x - 2}$



4)  $f(x) = \frac{x - 3}{x - 1}$



5)  $f(x) = \frac{2x - 8}{x - 1}$



6)  $f(x) = \frac{-2x - 4}{x}$

