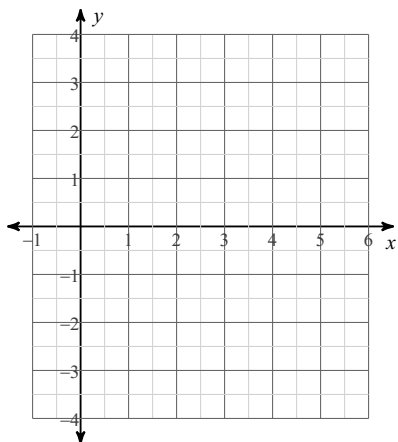


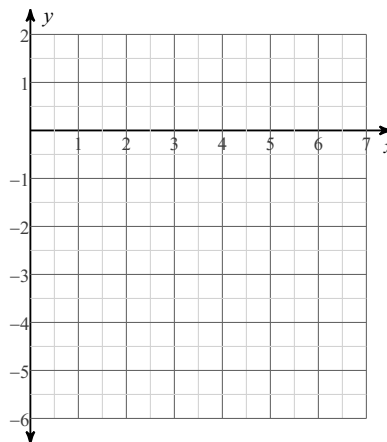
# HW #8 Graphing Quadratic Equations

Sketch the graph of each function.

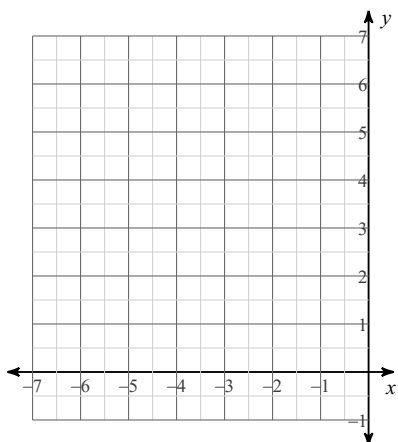
1)  $y = x^2 - 8x + 14$



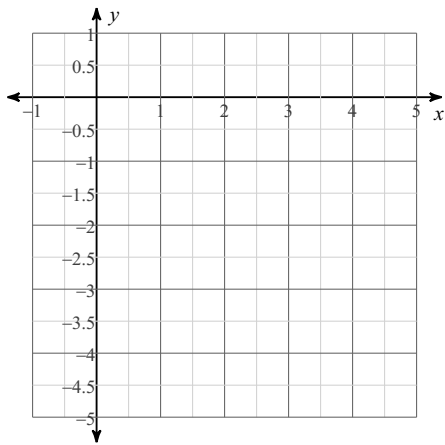
2)  $y = x^2 - 8x + 12$



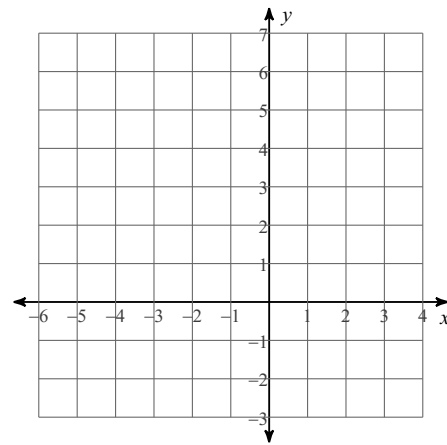
3)  $y = x^2 + 8x + 17$



4)  $y = x^2 - 6x + 5$



5)  $y = 2x^2 + 8x + 6$



6)  $y = 2x^2 + 8x + 7$

